

Class: V
Topic: Pre-Algebra
Practice Sheet #02

1. Order the temperatures from warmest to coldest.

 -12°F , 98°F , 32°F , -5°F _____

 21°C , 13°C , -4°C , -0°C _____

2. Can any negative integer be greater than a positive integer? Explain.

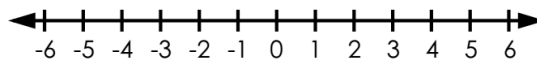
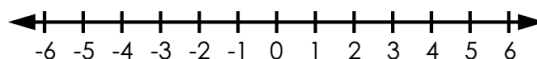
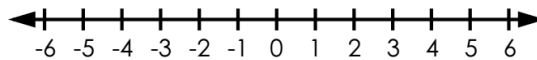
 Ans: _____

 3. There are 686,923 people living in Alaska.
 There are 873,092 people living in Delaware.
 Which state has the greater population?

Ans: _____

 The size of Texas is 268,581 square miles.
 Minnesota is 86,939 square miles.
 Which state has a smaller area?

Ans: _____

 4. a. $-3 + 7 =$ _____

 b. $2 + (-5) =$ _____

 c. $-1 + (-2) =$ _____

 5. Last night the temperature in New York City went down to 4°F . In Antarctica, the temperature went down to -20°F . What is the difference between the two temperatures?

answer: _____

 In Antarctica, the air temperature is -5°F .
 The temperature of the nearby water is 33°F . How much colder is the air than the water?

answer: _____

